

GLOBAL TALENT SEARCH EXAMINATION

ENVIRONMENTAL STUDIES

Class : III

Max Marks : 80

Time : 11:00 to 12:30 noon

Instructions to Candidates :

01. This question paper has 40 objective questions. In addition to this question paper, you are also given an answer-sheet.
02. Read the instructions carefully for each section before attempting it.
03. For each correct answer **2 marks** will be awarded and there is no negative marking.
04. On the answer-sheet, fill up all the entries carefully in the space provided, **ONLY IN BLOCK CAPITAL LETTERS.**
05. Incomplete / incorrect / carelessly filled information may disqualify your candidature.
06. On the answer-sheet, use **PENCIL / BLUE or BLACK BALL PEN.**
07. No extra sheet will be provided for rough-work. Use the space available in the paper for your rough- work.
08. Use of calculator is not permitted.
09. No student is permitted to leave the examination hall before time is complete.
10. Use of unfair means shall invite cancellation of the test.

Roll No.

--	--	--	--	--	--	--	--

Centre No.

--	--	--	--	--

Male / Female _____

Name of the candidate : (In English only, as you would like it to be printed on the certificate).

Signature of the
invigilator

Signature of
the candidate

AMITY INSTITUTE FOR COMPETITIVE EXAMINATIONS

DELHI CENTRES: • E-25, Defence Colony, New Delhi - 110024. Ph.: 011-24336143/44, 24331000-02.

WEST DELHI : • B-1/632, Main Nazafgarh Road, Janakpuri, New Delhi - 110058. Ph.: 011-25573111/12/13/14.

EAST DELHI : • Amity International School, Mayur Vihar, Phase-I, Ext., Delhi, Ph.: 011-22710588.


GHAZIABAD CENTRE : • Amity International School, Sector-6, Vasundhara Yojna, Ghaziabad-201012. Ph.: 0120-2881002.

NOIDA CENTRE • Amity Campus, Sector-44, Noida - 201303. Ph.: 0120-2431839, 2431842.

GURGAON CENTRE • Amity International School, Sector-43 & 46, Gurgaon, Haryana, Ph.: 0124-3240105.

Each question has four alternatives marked (A), (B), (C) and (D), but only one of these alternatives is the correct answer.

1. Different trees have different leaves. Name the trees, in proper order, to which the following leaves belong.



(1)



(2)



(3)



(4)

- (A) *Peepal* tree, *neem* tree, banana tree, mango tree,
(B) *Peepal* tree, mango tree, banana tree, *neem* tree
(C) *Peepal* tree, banana tree, mango tree, *neem* tree
(D) Banana tree, mango tree, *peepal* tree, *neem* tree
2. Which one of the following fruits makes other fruits and vegetables tastier ?
- (A) Lemon (B) Mango
(C) Banana (D) Apple
3. Which one of the following animals can remain without water even for three or four days ?
- (A) A giraffe (B) An elephant
(C) A horse (D) A camel
4. For which one of the following sources of energy, we don't have to spend money ?
- (A) Wood (B) Sunlight
(C) Electricity (D) Coal

5. Last year, Anuj got a watch as *birthday gift*. Since then he started noting time at each occasion. After one month, he went to Agra with his parents. He noted the time of departure from Delhi and time of arrival at Agra, as shown.



Departure from Delhi



Arrival at Agra

Time taken to travel from Delhi to Agra was

- (A) 5 hours, 10 minutes (B) 4 hours, 50 minutes
 (C) 4 hours, 20 minutes (D) 4 hours, 10 minutes
6. Cars, motorbikes and scooters have to visit which one of the following places very often ?
- (A) Hotel (B) Hospital
 (C) Shop (D) Petrol pump
7. In India, many sportsmen have made names in different sports. Some have won gold medals and some have made world records in thier own fields. In column I, name of some famous sports men are given and in column II sports connected with them are given. Make proper matching and tick-mark(✓) the correct answer.

Column I



Column II

- | | |
|------------------------|---------------------|
| (a) Sachin Tendulkar | (i) chess |
| (b) Vishwanathan Anand | (ii) weight lifting |
| (c) Sania Mirza | (iii) cricket |
| (d) Karnam Malleshwari | (iv) lawn tennis |



- (A) (a) - iii, (b) - iv, (c) - ii, (d) - i
 (B) (a) - iii, (b) - iv, (c) - i, (d) - ii
 (C) (a) - iii, (b) - i, (c) - iv, (d) - ii
 (D) (a) - iii, (b) - i, (c) - ii, (d) - iv

In each of the following five questions, one of the four members of the group is different from the other three. Tick-mark(✓) the different member of the group.

8. (A)  Crow (B)  Kite

(C)  Pigeon (D)  Owl

9. (A) Wheat (B) Rice
(C) Water (D) Maize

10. (A)  Ladyfinger (B)  Egg

(C)  Cauliflower (D)  Potato

11. (A) School (B) Church
(C) Temple (D) Mosque

12. (A)  Potato (B)  Mango

(C)  Banana (D)  Apple

13. Different animals move in different ways to go from one place to another. Relate the animals given in column I with the corresponding ways of movement in column II and tick-mark(✓) the correct relation.

Column I

Column II

(a) Lizard

(i) hop

(b) Sheep

(ii) fly

(c) Frog

(iii) walk

(d) Pigeon

(iv) crawl

(A) (a) - ii, (b) - iii, (c) - i, (d) - iv

(B) (a) - iv, (b) - i, (c) - ii, (d) - iii

(C) (a) - iv, (b) - iii, (c) - i, (d) - ii

(D) (a) - ii, (b) - iii, (c) - iv, (d) - i

14. Which one of the following is *not* a natural source of water ?

(A) Stream

(B) River

(C) Spring

(D) Pond

15. 'Fours and sixes if you can get

A century is sure, I can bet'

The above words can be associated with which one of the following games ?

(A) Lawn Tennis

(B) Football

(C) Cricket

(D) Volleyball

16. There are many methods of cooking food. Water is mainly used for which one of the following methods of cooking ?


(A) Baking

(B) Boiling

(C) Frying

(D) Roasting

17. Which one of the following animals will be formed after pasting the parts of the following figures in proper positions ?



- (A) Camel (B) Giraffe
(C) Zebra (D) Horse

18. Tick-mark(✓) the *wrong* statement from the following.

- (A) Baking and roasting are also some methods of cooking food
(B) A person who repairs a car or scooter is called mechanic
(C) *Tup-tup* sound is associated with moving *tonga* driven by a horse
(D) The feathers of all the birds are of same shape

19. Which one of the following fruits is *not* grown on a tree ?

- (A) Orange (B) Melon
(C) Mango (D) Banana

20. Which one of the following is different from the other three ?


- (A) Potato (B) Garlic
(C) Ginger (D) Onion

21. Tick mark (✓) the correct sequence of the names of the following flowers.



- (A) Sunflower, jasmine, lotus, rose
(B) Jasmine, lotus, sunflower, rose
(C) Jasmine, sunflower, lotus, rose
(D) Jasmine, sunflower, rose, lotus
22. Hump, hoof and trunk are associated in proper order with
(A) camel, horse and elephant
(B) camel, elephant and horse
(C) elephant, camel and horse
(D) horse, elephant and camel
23. Olympic Games are held after every
(A) six years (B) five years
(C) four years (D) three years
24. Dead body of an animal decays very soon. This decayed body produces germs which in turn can cause diseases. Which of the following birds eats the dead bodies of the animals to stop it from decaying ?
(A) Kite (B) Crow
(C) Owl (D) Vulture
25. Kitten is the young one of
(A) cow (B) goat
(C) hen (D) cat

26. Which one of the following birds will be formed after pasting the parts of the following figures in proper positions ?



- (A) Crow (B) Peacock
(C) Hen (D) Parrot

27. Relate the birds given in column I with the foods which they eat/like given in column II and tick-mark(✓) the correct relation

Column I

Column II

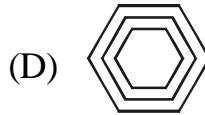
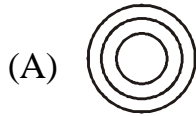
- | | |
|----------------|-----------------------------|
| (a) Woodpecker | (i) grains |
| (b) Crow | (ii) dead bodies of animals |
| (c) Vulture | (iii) eggs of other birds |
| (d) Pigeon | (iv) insects |

- (A) (a) - iii, (b) - iv, (c) - ii, (d) - i
(B) (a) - iv, (b) - iii, (c) - ii, (d) - i
(C) (a) - iii, (b) - i, (c) - iv, (d) - ii
(D) (a) - iv, (b) - iii, (c) - i, (d) - ii

28. A cyclist is riding on a bicycle through a busy street. Which one of the following sounds is made by the cycle to alert the persons in the busy street ?

- (A) *Chhuk-Chhuk* (B) *Peen-Peen*
(C) *Tring-Tring* (D) *Tup-Tup*

29. Which of the following is different from the other three ?



30. Which one the following persons cannot become a singer ?

- (A) A lame person (who cannot walk)
- (B) A blind person (who cannot see)
- (C) An illiterate person (who cannot read or write)
- (D) A deaf person (who cannot hear)

31. Which one of the following colours is *not* used for traffic signals ?

- (A) Red
- (B) Yellow
- (C) Green
- (D) Blue

32. King, queen and knight are associated with which one of the following games ?

- (A) Playing Cards
- (B) Carom
- (C) Chess
- (D) Ladder and Snake

33. Tick-mark(✓) the *incorrect* statement from the following.

- (A) All cities in India are connected with railways
- (B) Braille is a special way of reading and writing for blind persons
- (C) For going to big cities in different countries, people use aeroplanes
- (D) For talking to persons in different cities, we use either telephone or mobile

34. Which one of the following is *not* connected with the other three ?

- (A) Stamp
- (B) Telephone
- (C) Letter
- (D) Postman

35. Match the statements of column I and column II and tick-mark(\surd) the correct answer.

Column I

Column II

(a) Aeroplane

(i) river

(b) Bus

(ii) sea

(c) Boat

(iii) sky

(d) Ship

(iv) road

(A) (a) - iii, (b) - iv, (c) - ii, (d) - i

(B) (a) - iii, (b) - iv, (c) - i, (d) - ii

(C) (a) - ii, (b) - iv, (c) - i, (d) - iii

(D) (a) - iii, (b) - ii, (c) - iv, (d) - i

36. Below is given a mesh with small squares in which modes of transportation are written. These are written along horizontal lines.

A	I	R	B	O	A	T	B	U	S
T	R	A	I	N	M	A	C	G	O
R	A	E	R	O	P	L	A	N	E
B	I	S	H	I	P	F	P	Y	N
I	T	H	Z	E	B	A	S	J	M
C	A	R	B	I	C	Y	C	L	E

How many modes of transportation are hidden in the above mesh ?

(A) 5

(B) 6

(C) 7

(D) 8

37. Match different persons given in column I with works which they perform given in column II and tick-mark(✓) the correct answer.

Column I

Column II

(a) Cobbler

(i) brick-work

(b) Carpenter

(ii) motorcycle repair

(c) Mason

(iii) wood-work

(d) Mechanic

(iv) shoe repair

(A) (a) - iv, (b) - iii, (c) - ii, (d) - i

(B) (a) - iv, (b) - iii, (c) - i, (d) - ii

(C) (a) - iv, (b) - i, (c) - ii, (d) - iii

(D) (a) - iii, (b) - iv, (c) - i, (d) - ii

38. You are familiar with some birds. Most of you see some birds almost daily. Some birds are hidden in the mesh of small squares, given below. The birds are written in vertical lines.

R	A	L	I	C	S	O	W	P
D	P	Y	P	R	P	E	K	E
P	A	R	I	O	A	F	I	A
A	R	O	G	W	R	N	T	C
B	R	P	E	G	R	O	E	O
U	O	J	O	V	O	U	T	C
O	T	P	N	A	W	O	C	K

How many birds are hidden in the above mesh ?

(A) 4

(B) 5

(C) 6

(D) 7

39. India's first Prime Minister was

(A) Sardar Patel

(B) Jawahar Lal Nehru

(C) Rajinder Prasad

(D) Lal Bahadur Shastri

40. In the crossword, names of some animals are given either along a line (horizontal) or along a column (vertical).

G	O	H	T	M	G	M	B
E	C	O	W	L	O	O	I
E	L	E	P	H	A	N	T
T	I	R	A	T	T	K	E
A	O	S	T	I	G	E	R
M	N	H	O	R	S	E	S

Which of the following animals is *not* given in this crossword ?

(A) Elephant

(B) Monkey

(C) Tiger

(D) Horse

ANSWERS : CLASS III ENVIRONMENTAL STUDIES

1	B	2	A	3	D	4	B	5	D
6	D	7	C	8	D	9	C	10	B
11	A	12	A	13	C	14	D	15	C
16	B	17	A	18	D	19	B	20	A
21	C	22	A	23	C	24	D	25	D
26	D	27	B	28	C	29	B	30	D
31	D	32	C	33	A	34	B	35	B
36	C	37	B	38	C	39	B	40	B